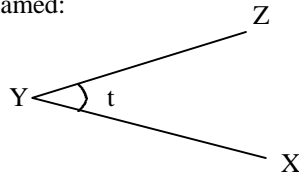


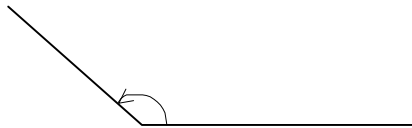
Geometry
 Quiz 1
 Angles, Length, Perimeter, & Circumference

1.) List three unique ways this angle can be named:

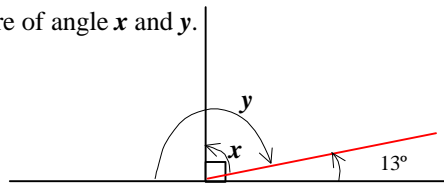


2.) The angle shown below is classified as:

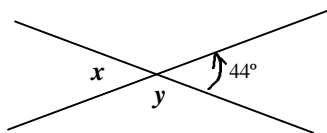
- a) Straight angle
- b) Right angle
- c) Acute angle
- d) Obtuse angle



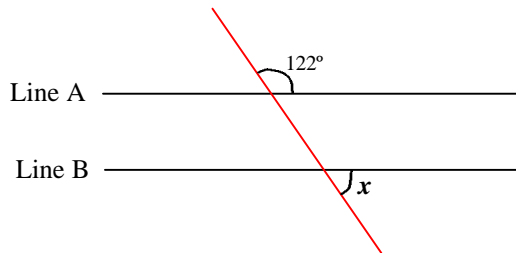
3.) Determine the measure of angle x and y .



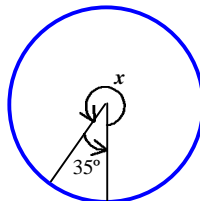
4.) Determine the measure of angle x and y .



5.) Line A is parallel to Line B. Determine the measure of angle x .

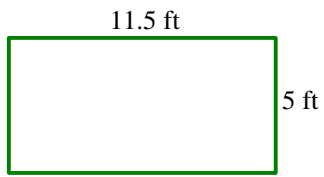


6.) Determine the measure of angle x .

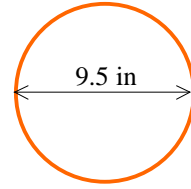


7.) Determine the perimeter (or circumference) of each object. Include the correct units of measure for each answer.

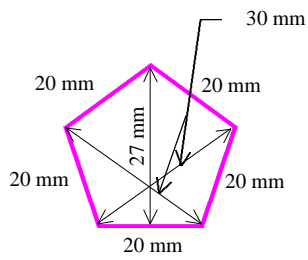
a.)



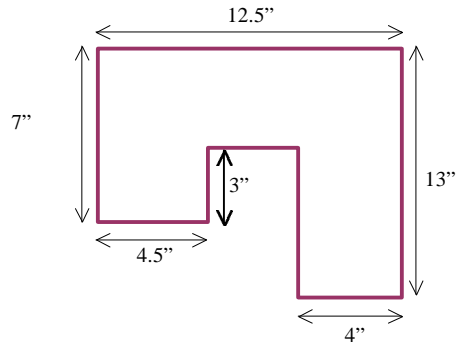
b.)



c.)



d.)



e.)

